



Counting Worksheet 1

Missing Numbers

Parents, help your child to:

1. Identify the missing number in the sequences below

2. Write the missing number in the space provided

1	2	3	—	5
---	---	---	---	---

8	9	—	11	12
---	---	---	----	----

10	11	12	—	14
----	----	----	---	----

—	18	19	—	21
---	----	----	---	----

20	21	—	23	24
----	----	---	----	----





Counting Worksheet 2

Missing Numbers

Parents, help your child to:

1. Identify the missing number in the sequences below

2. Write the missing number in the space provided

4 5 6 — 8

12 — 14 15 16

— 15 16 17 —

20 21 — 23 24

26 27 — — 30





Counting Worksheet 3

Missing Numbers

Parents, help your child to:

1. Identify the missing number in the sequences below

2. Write the missing number in the space provided

27 28 _____ 30 31


44 _____ 46 47 48

52 _____ 54 _____ 56

_____ 66 67 68 69

78 79 _____ 81 _____





Counting Worksheet 4

Missing Numbers



Parents, help your child to:

1. Identify the missing number in the sequences below

2. Write the missing number in the space provided

_____    _____

 _____  _____ 

_____  _____ _____ 

 _____  _____ 

_____ _____  _____ 

