


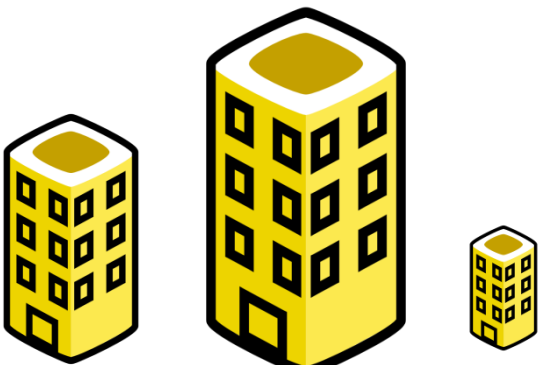






Learning Measurement

Worksheet 1: Which is the Tallest?

Parents, help your child to identify which picture is the tallest in each box and circle it.

 Three giraffes are shown. The one on the left is the tallest, the one in the middle is the shortest, and the one on the right is medium height.	 Three trees are shown. The one on the left is medium height, the one in the middle is the shortest, and the one on the right is the tallest.
 Three cartoon boys are shown. The one on the left is the shortest, the one in the middle is medium height, and the one on the right is the tallest.	 Three yellow buildings with black windows are shown. The one on the left is medium height, the one in the middle is the tallest, and the one on the right is the shortest.
 Three wooden ladders are shown. The one on the left is the shortest, the one in the middle is the tallest, and the one on the right is medium height.	 Three red flags on black poles are shown. The one on the left is the tallest, the one in the middle is medium height, and the one on the right is the shortest.

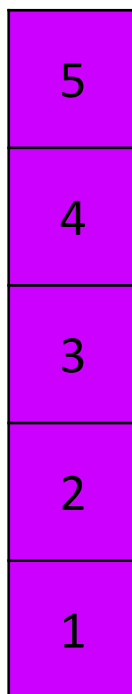







Learning Measurement

Worksheet 2: How Tall is it?

Parents, help your child to:

1. Count how many squares tall each picture is, then write that number in the box.





Learning Measurement

Worksheet 3: Let's Measure!

Parents, help your child to:

1. Cut out the ruler at the bottom of the page
2. Find the objects pictured in your house.
3. Using the ruler, measure the objects and write the measurement in the box.
4. The last ones have been left blank so you and your child can find something to measure, and draw it in!

